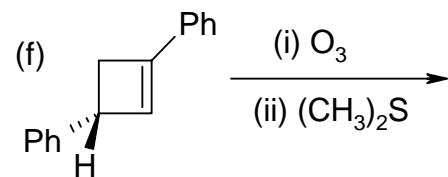
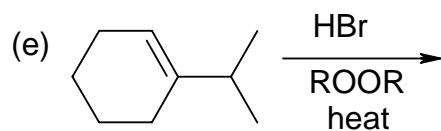
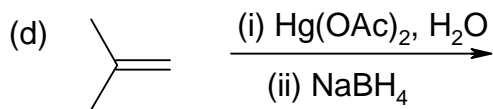
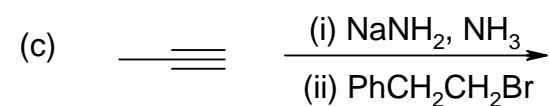
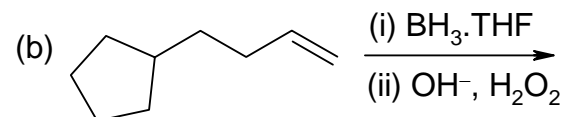
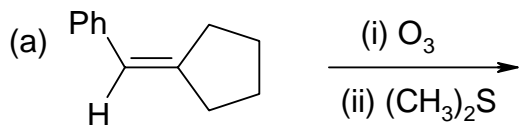


Chemistry 341 Recitation #14

1. Predict the significant product(s) from the following reactions, showing all stereochemistry. If more than one product is formed, indicate which is the major product.



2. Give a systematic name (including stereochemistry) for each of the following:

