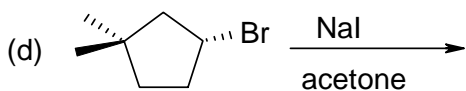
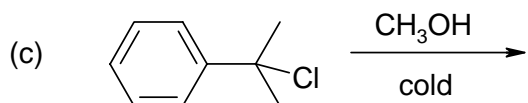
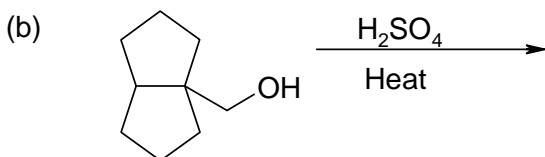
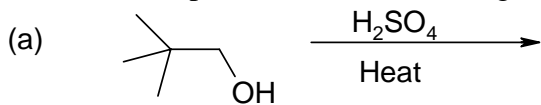
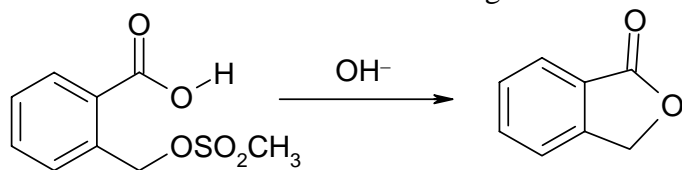


Chemistry 341  
Recitation #11

1. Predict the product for the following reactions:



2. Give a mechanism for the following reaction:



3. Indicate suitable reagents & conditions (i.e. solvents, temperatures, etc.) for each of the following conversions:

